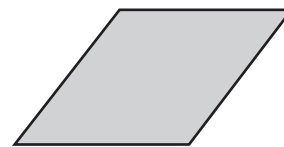
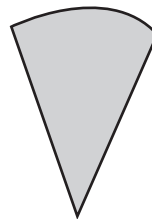
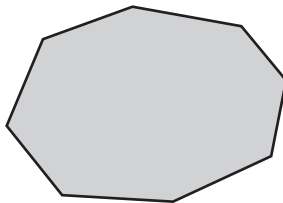

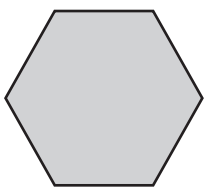


Sorting 2D shapes

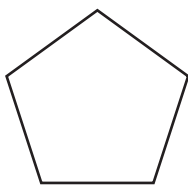
1 Match each shape to the correct group.

Polygons

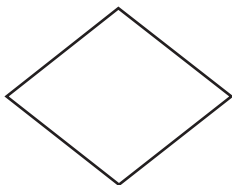
Not polygons



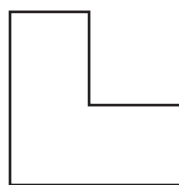
2 Sort these shapes into order by number of vertices, from the fewest number of vertices to the most.



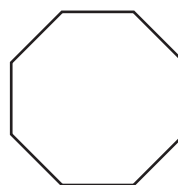
A



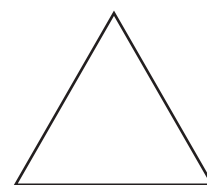
B




C



D



E



F

Fewest _____ Most