


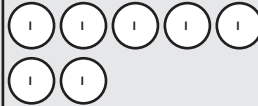



Adding and subtracting Is, 10s, 100s, 1,000s



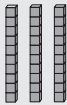

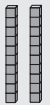
1 Solve these calculations.

a)

Th	H	T	O
			
			





$$4,137 + 2 = \boxed{}$$

b)

Th	H	T	O
			
			

$$4,137 + \boxed{} = \boxed{}$$

2 Work out the missing numbers.

Th	H	T	O
			

a) $6,666 + 2 = \boxed{}$

d) $6,666 - 200 = \boxed{}$

b) $6,666 + 20 = \boxed{}$

e) $6,666 = \boxed{} - 200$

c) $2,000 + 6,666 = \boxed{}$